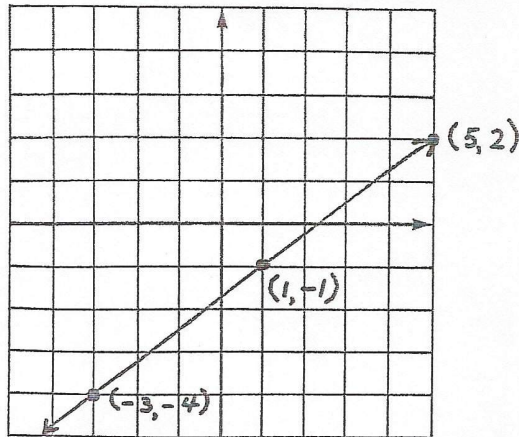


Graph two equations on each grid.

1. $3x - 4y = 7$

x	y
1	-1
-3	-4
5	2

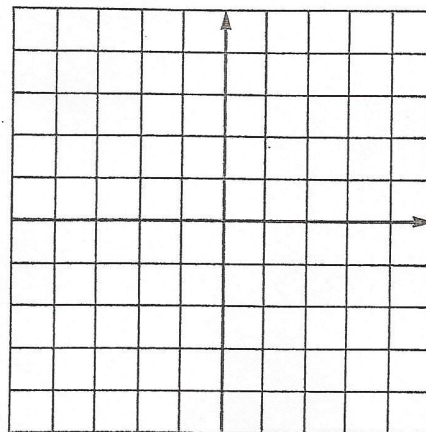


2. $3x - y = 2$

x	y

3. $x + 2y = 0$

x	y

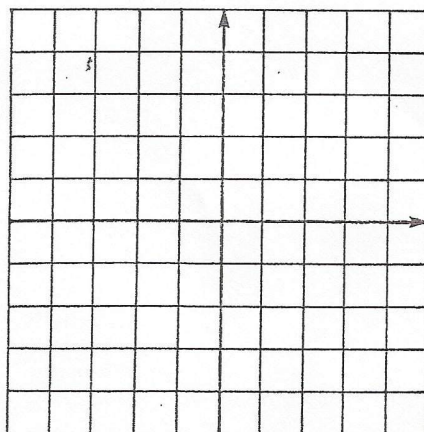


4. $2x - y = 2$

x	y

5. $2x + 3y = 6$

x	y



6. $3x + y = 1$

x	y